

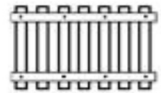
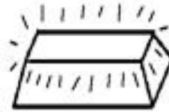
Wat staat hieronder?

7

e = il n = r



-p



k = b



ha = i



oo = ie

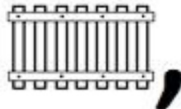


n = r

wat



ha = i



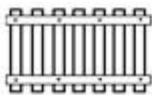
k = b



k = d

1

g+ n = f



he = i



-i