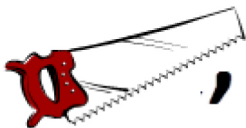
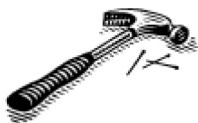


Wat staat hieronder?

10

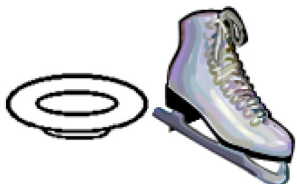


i = o

-er + an

-a

k = d



8



b = m s = e ats = i

a = zi -t

oo = ie

9



8

8



gen = ig -n

a = no -t

a = zi -t

v+

-d



b = n

b+

-n

bo = we

-er + an



0



30



-e n = v +d

p = m

raa = gri dert = m m = i